






Name: _____

Image Subtraction Activity Sheet

Directions: Count how many space images are there in each box.
Subtract the crossed-out image. Color the circle that has the correct answer.

	<div>1</div> <div>2</div> <div>3</div>
	<div>0</div> <div>1</div> <div>2</div>
	<div>6</div> <div>10</div> <div>5</div>
	<div>3</div> <div>6</div> <div>4</div>
	<div>4</div> <div>2</div> <div>1</div>